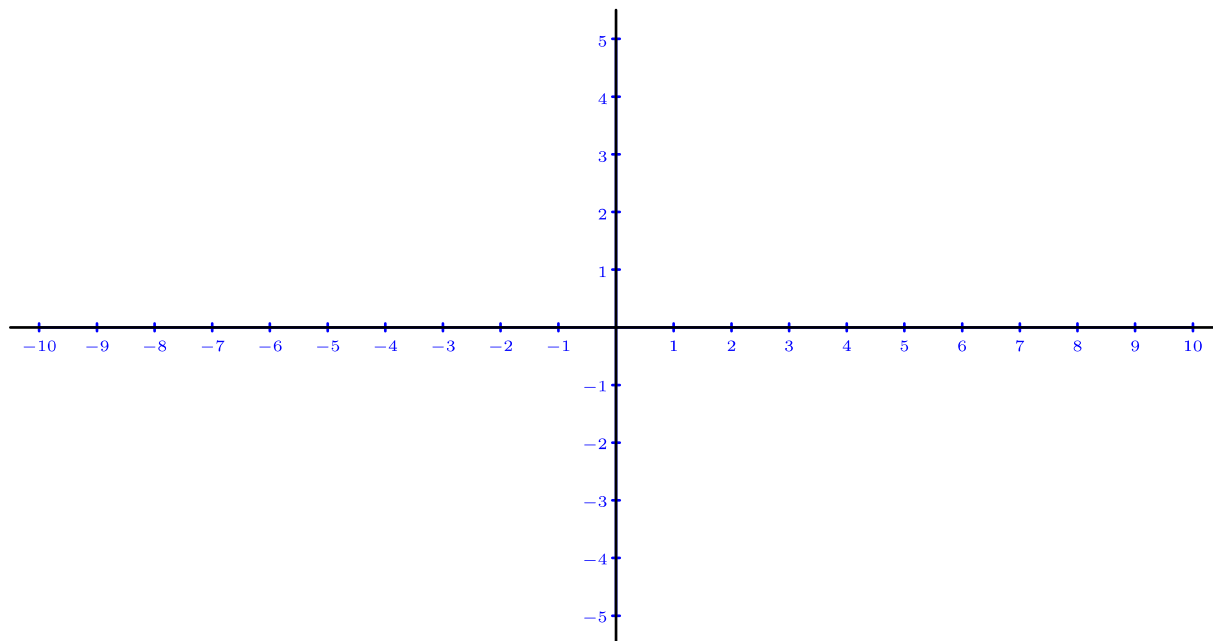


Enunciados

Representa gráficamente los puntos propuestos en cada ejercicio. Señala únicamente los puntos y sus nombres.

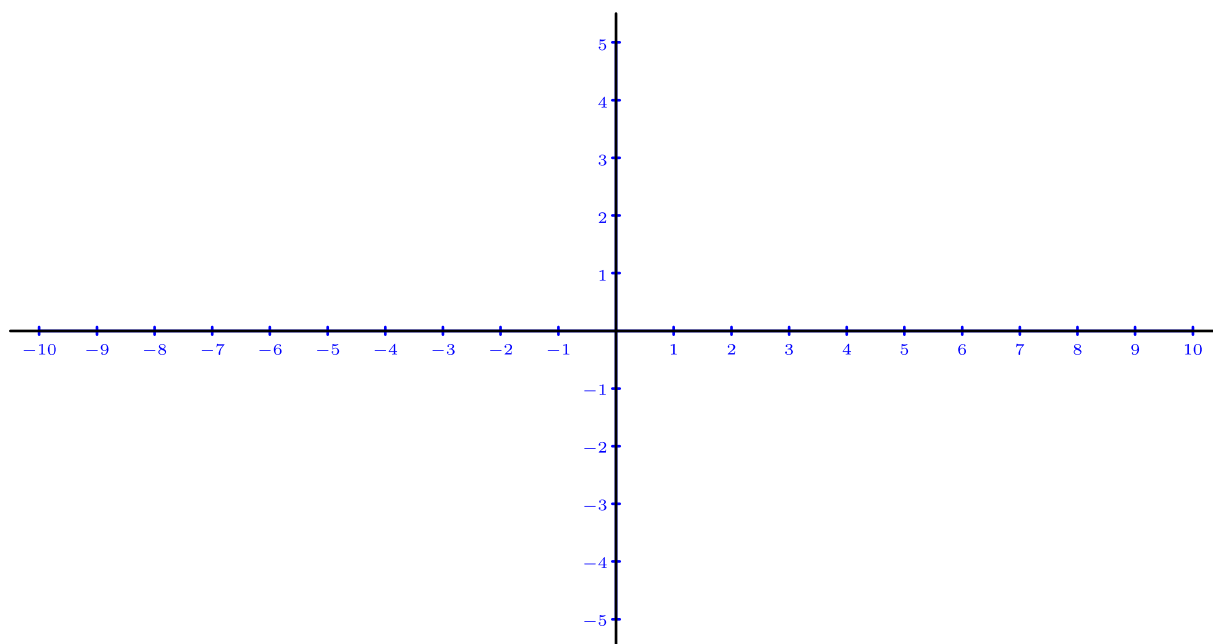
①

$A = (7,-2)$	$B = (4,0)$	$C = (3,5)$	$D = (-10,3)$	$F = (0,-5)$
$G = (3,-4)$	$H = (-8,0)$	$I = (-7,-2)$	$J = (9,2)$	$K = (-2,3)$
$L = (6,3)$	$M = (-4,-1)$	$Q = (0,3)$	$R = (-9,-3)$	$T = (6,1)$



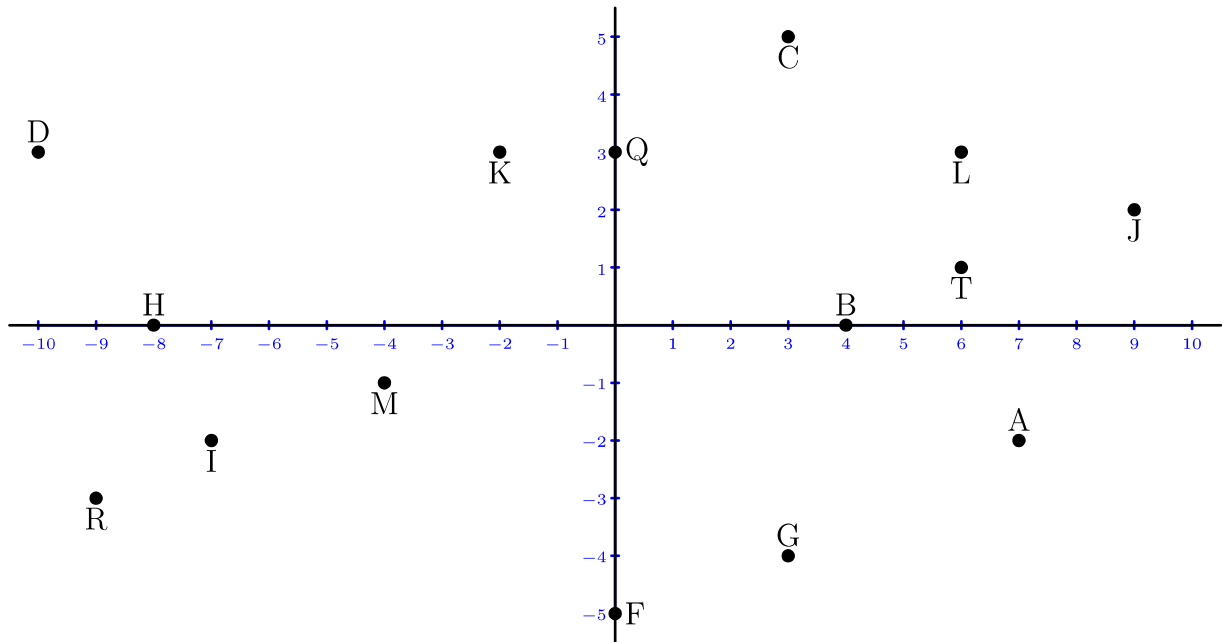
②

$A = (1,0)$	$B = (-4,5)$	$C = (0,-5)$	$D = (10,1)$	$F = (4,4)$
$G = (-10,-1)$	$H = (8,3)$	$I = (0,3)$	$J = (2,-2)$	$K = (-7,-3)$
$L = (6,-3)$	$M = (-7,4)$	$Q = (1,5)$	$R = (8,-1)$	$T = (4,-1)$



Soluciones

①



②

