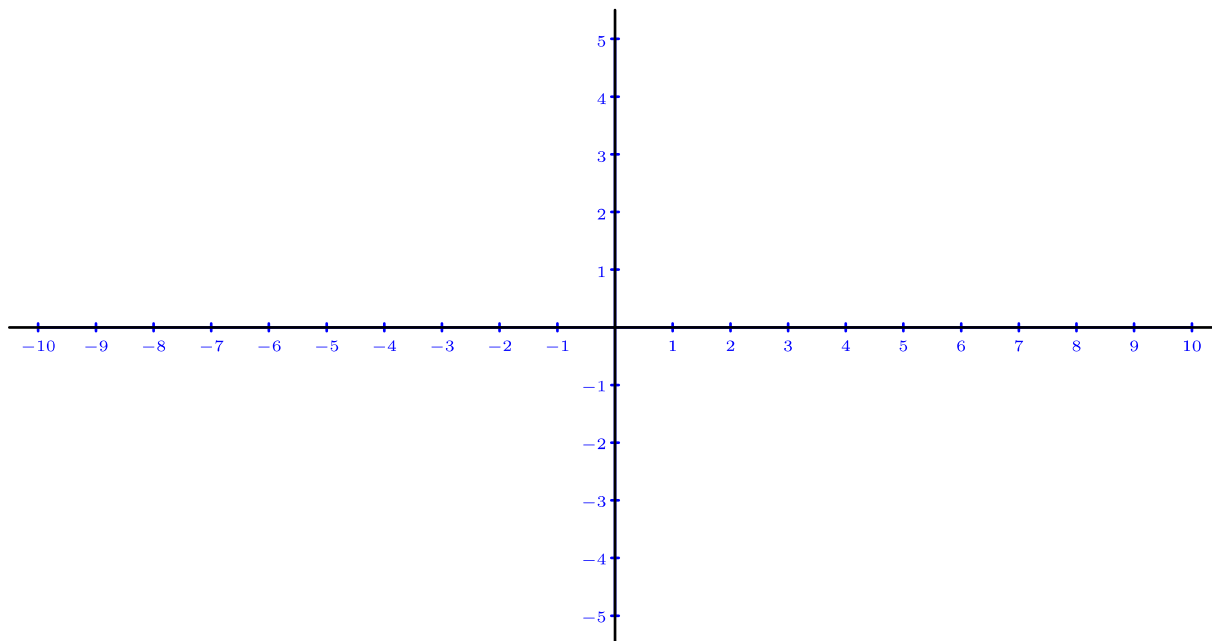


Enunciados

Representa gráficamente los puntos propuestos en cada ejercicio. Señala únicamente los puntos y sus nombres.

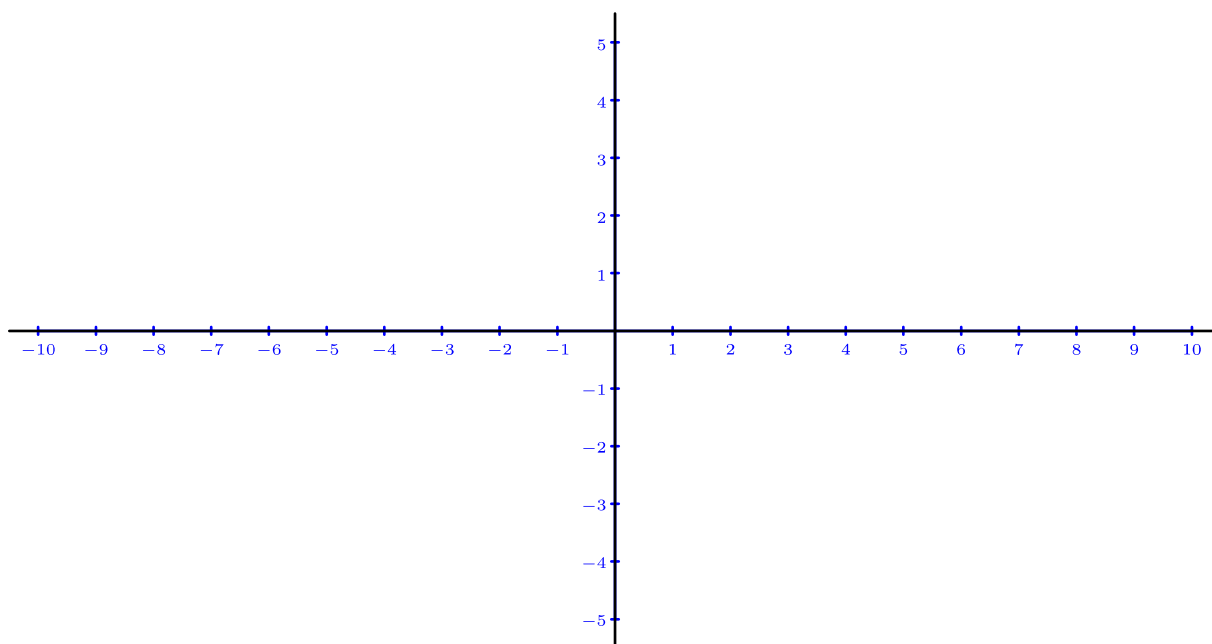
①

| | | | | |
|---------------|---------------|---------------|--------------|--------------|
| $A = (10,4)$ | $B = (-7,5)$ | $C = (-8,-4)$ | $D = (9,-3)$ | $F = (7,0)$ |
| $G = (0,2)$ | $H = (-10,0)$ | $I = (0,-5)$ | $J = (4,3)$ | $K = (-6,2)$ |
| $L = (-3,-4)$ | $M = (3,-2)$ | $Q = (1,4)$ | $R = (-2,5)$ | $T = (5,-5)$ |



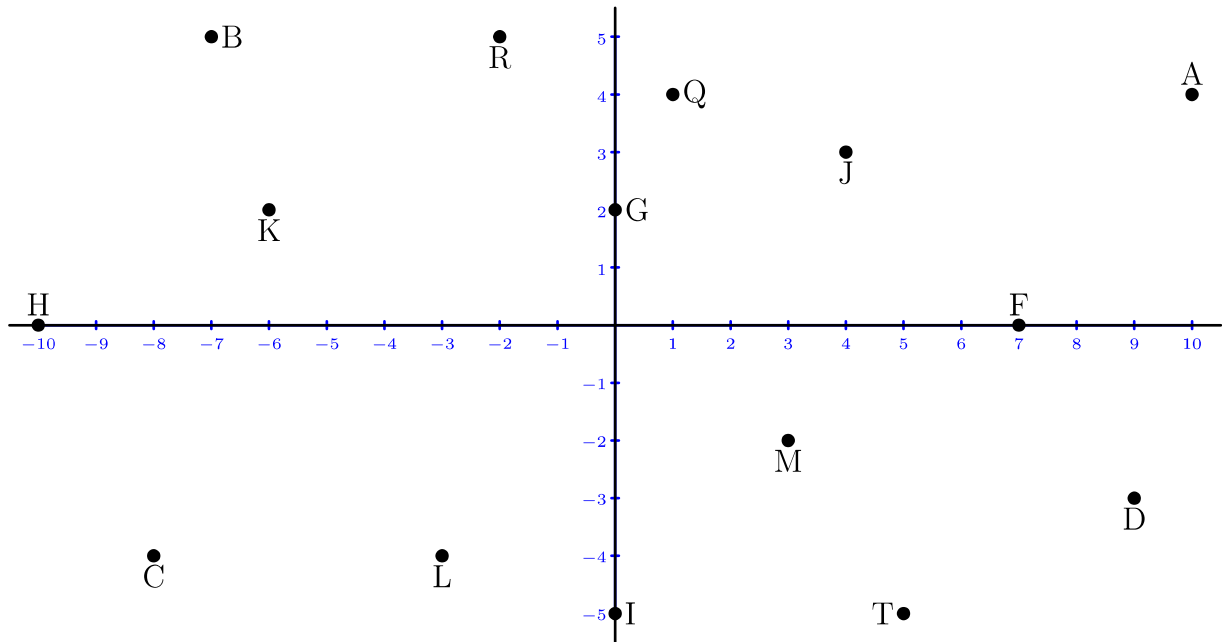
②

| | | | | |
|---------------|--------------|---------------|--------------|--------------|
| $A = (2,3)$ | $B = (-3,4)$ | $C = (-4,-1)$ | $D = (3,-4)$ | $F = (2,0)$ |
| $G = (0,4)$ | $H = (-8,0)$ | $I = (0,-1)$ | $J = (10,5)$ | $K = (-9,4)$ |
| $L = (-7,-3)$ | $M = (8,3)$ | $Q = (8,-2)$ | $R = (6,-4)$ | $T = (9,2)$ |



Soluciones

①



②

