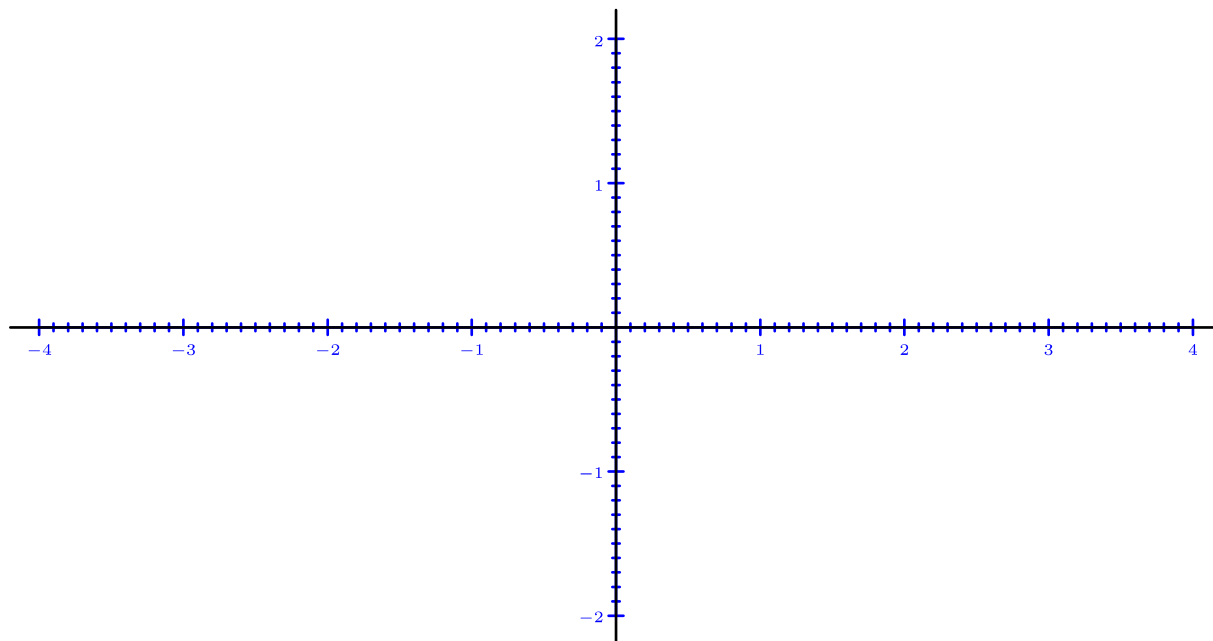


Enunciados

Representa gráficamente los puntos propuestos en cada ejercicio. Señala únicamente los puntos y sus nombres.

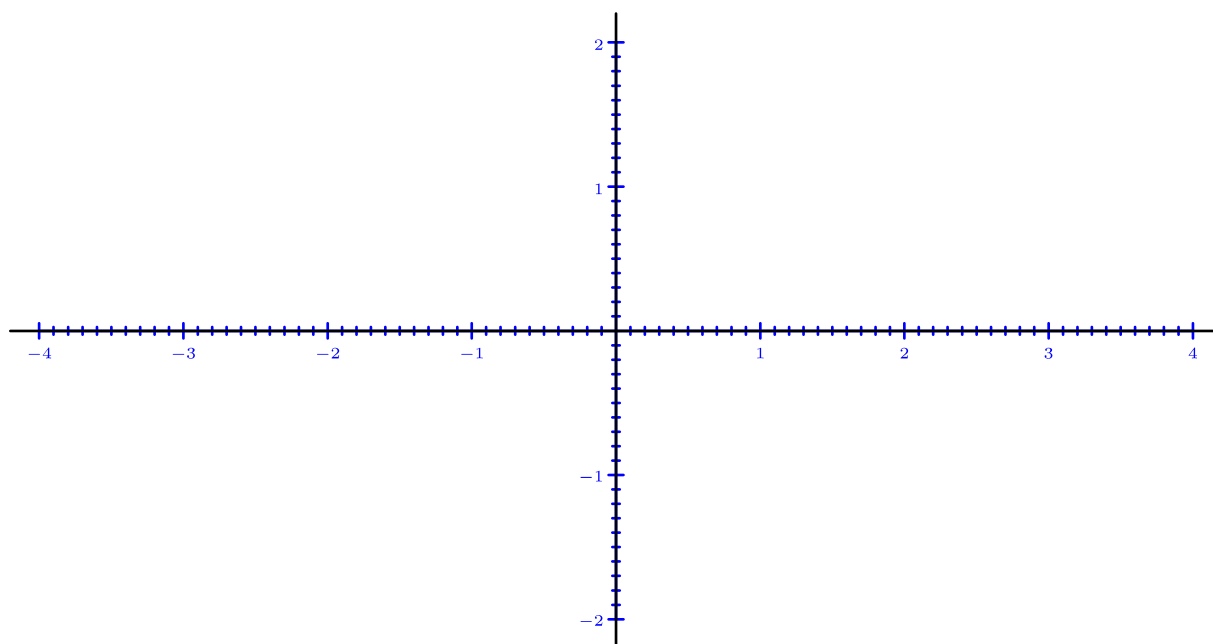
①

$A = (0;-0,8)$	$B = (1,6;1,2)$	$C = (3,9;0)$	$D = (-3,5;-1,5)$	$F = (-3,4;1,8)$
$G = (3,7;-1,1)$	$H = (-1,8;1,8)$	$I = (3;1,6)$	$J = (-1,2;0)$	$K = (2;-1,3)$
$L = (-2,3;-1,3)$	$M = (-0,7;1,7)$	$Q = (1,3;-1,9)$	$R = (2,7;-1,2)$	$T = (-2,6;0,9)$



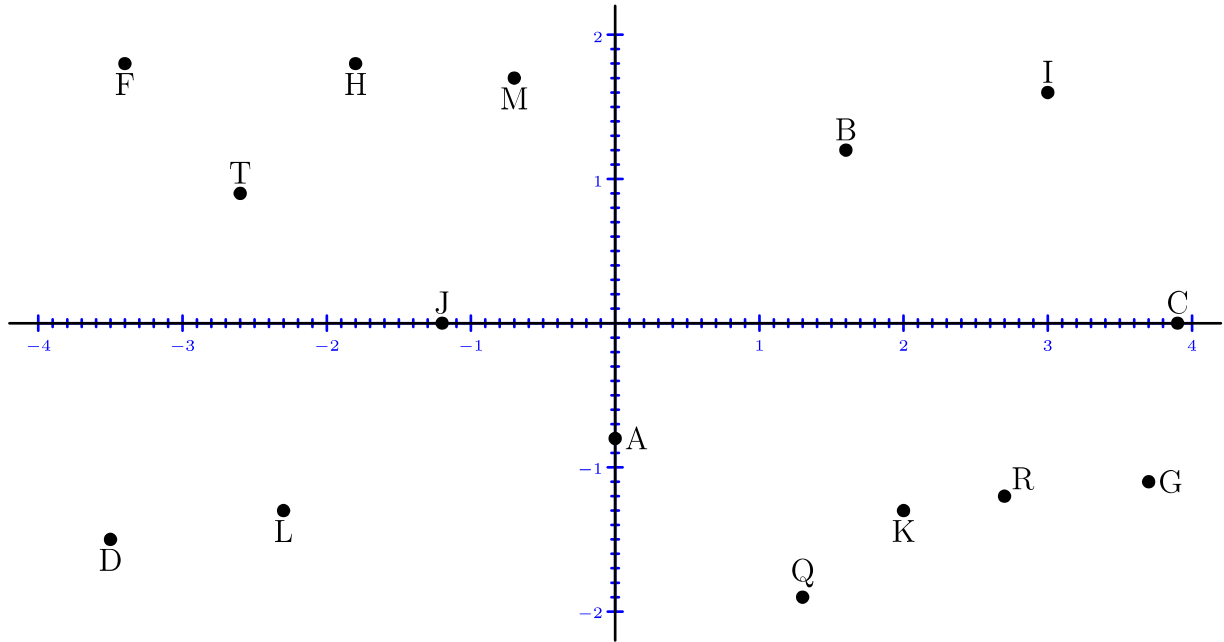
②

$A = (-1,3;1,8)$	$B = (0;-1,3)$	$C = (-3,1;0)$	$D = (-2,5;1,5)$	$F = (2,3;-1,8)$
$G = (1,7;-0,5)$	$H = (-1,9;-1,5)$	$I = (3,3;-0,3)$	$J = (-1,4;0)$	$K = (3,9;-1,9)$
$L = (0;0,1)$	$M = (1,2;1)$	$Q = (-0,1;-0,8)$	$R = (-3,9;1)$	$T = (1,2;-0,7)$



Soluciones

①



②

