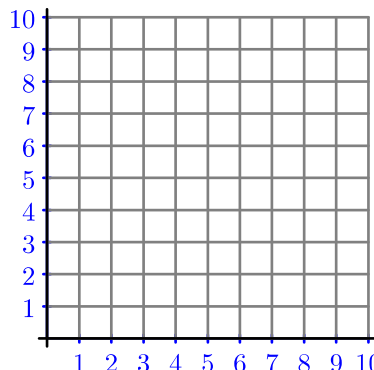
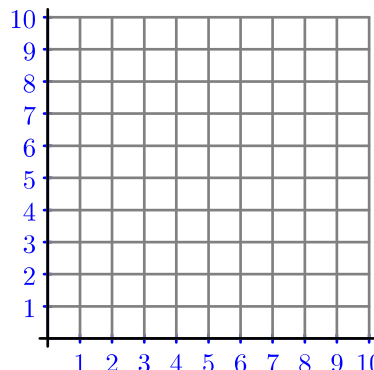
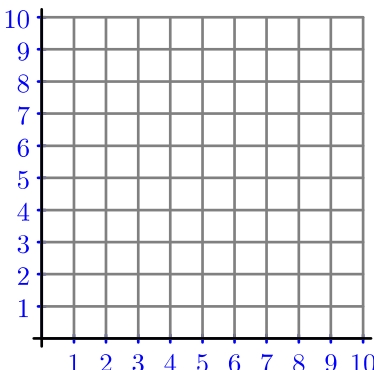
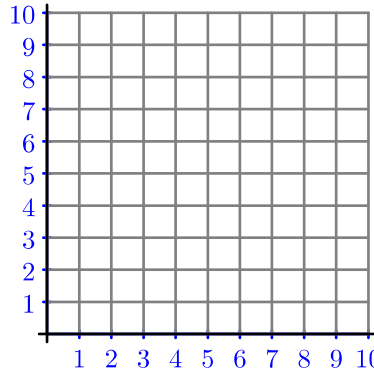
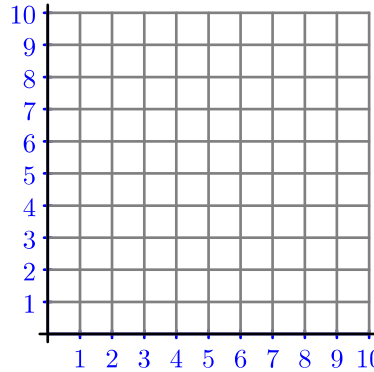
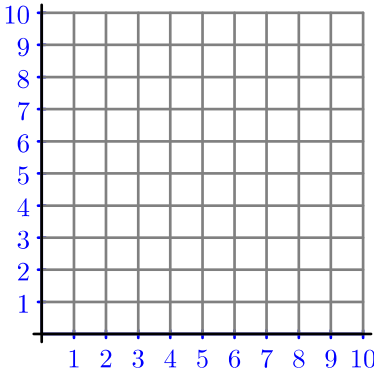
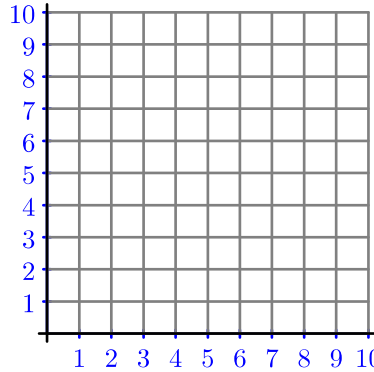
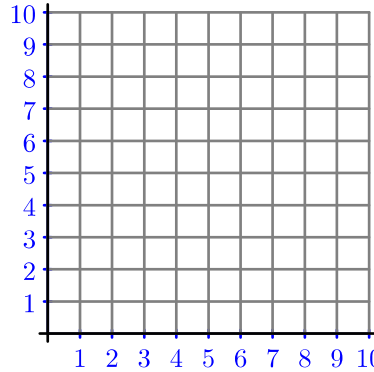
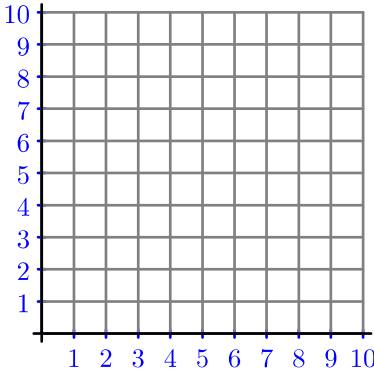
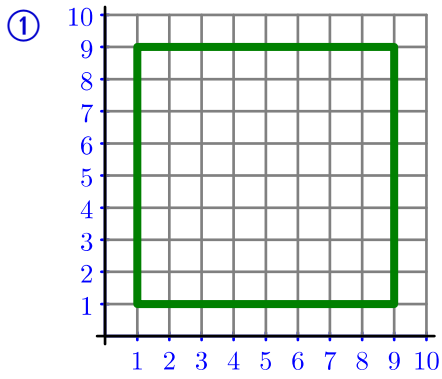


Enunciados

Representa gráficamente los siguientes cuadriláteros especificados mediante las coordenadas de sus vértices, que están escritos en el orden correcto. Después usa la palabra o palabras más específicas que puedas para nombrar los cuadriláteros.

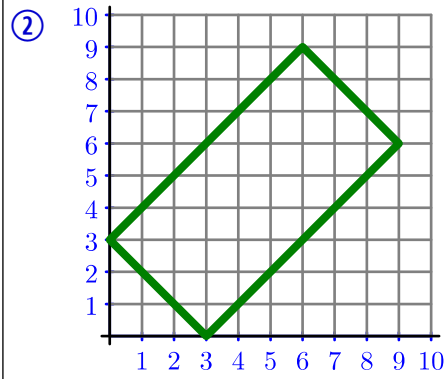
<p>①</p>  <p>(1,1) (9,1) (9,9) (1,9)</p>	<p>②</p>  <p>(3,0) (9,6) (6,9) (0,3)</p>	<p>③</p>  <p>(5,1) (8,5) (5,9) (2,5)</p>
<p>④</p>  <p>(8,10) (8,3) (2,1) (2,10)</p>	<p>⑤</p>  <p>(1,1) (10,2) (8,7) (3,6)</p>	<p>⑥</p>  <p>(2,9) (8,8) (8,1) (2,2)</p>
<p>⑦</p>  <p>(2,5) (6,9) (10,5) (6,1)</p>	<p>⑧</p>  <p>(4,9) (6,9) (9,2) (1,2)</p>	<p>⑨</p>  <p>(1,0) (1,10) (9,8) (9,5)</p>

Soluciones



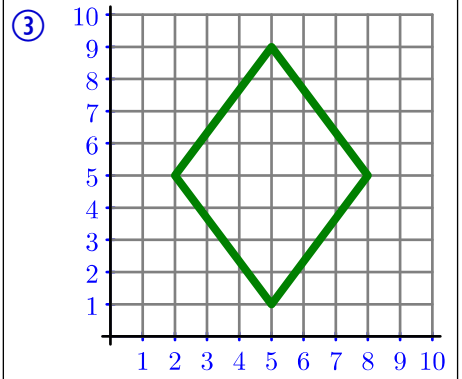
(1,1) (9,1) (9,9) (1,9)

Cuadrado



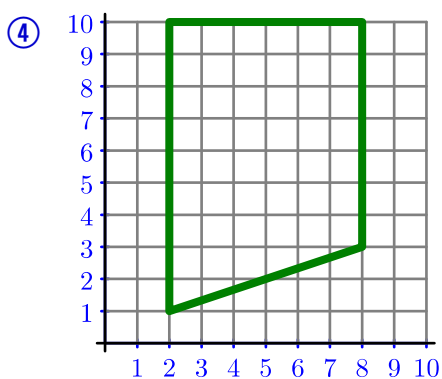
(3,0) (9,6) (6,9) (0,3)

Rectángulo



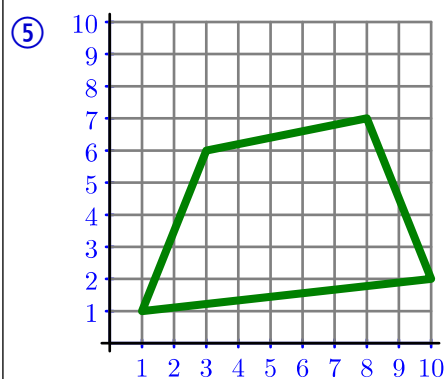
(5,1) (8,5) (5,9) (2,5)

Rombo



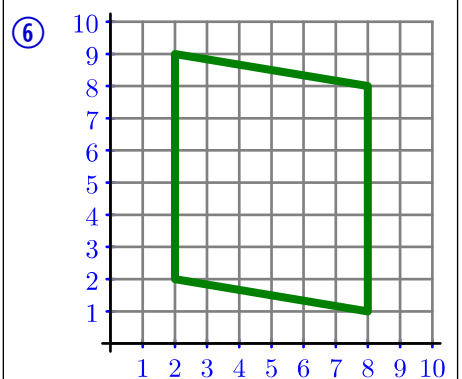
(8,10) (8,3) (2,1) (2,10)

Trapezio rectángulo



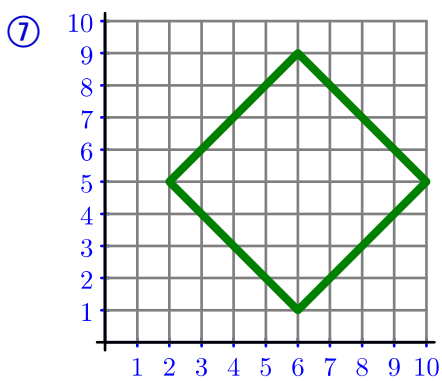
(1,1) (10,2) (8,7) (3,6)

Trapezoide



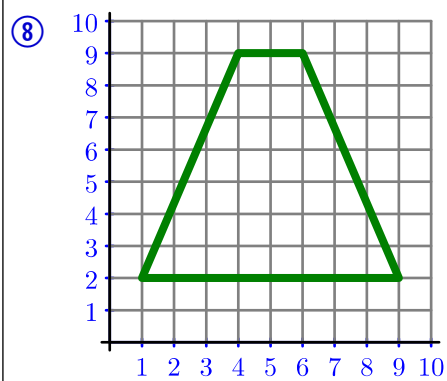
(2,9) (8,8) (8,1) (2,2)

Paralelogramo



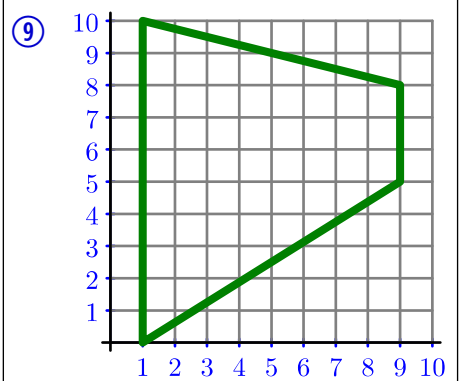
(2,5) (6,9) (10,5) (6,1)

Cuadrado



(4,9) (6,9) (9,2) (1,2)

Trapezio isósceles



(1,0) (1,10) (9,8) (9,5)

Trapezio