


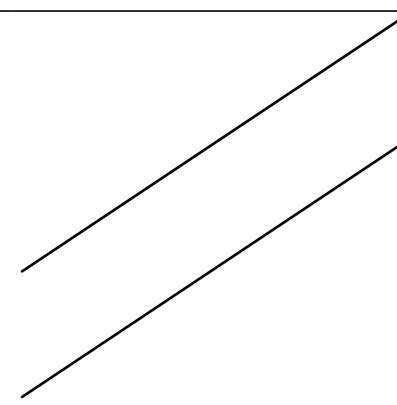
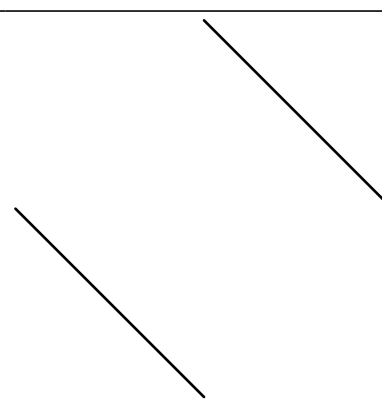
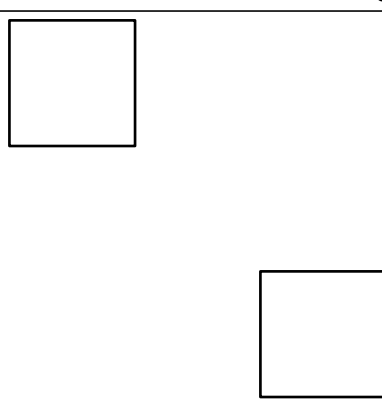
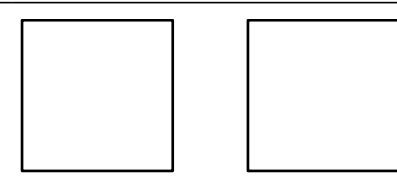
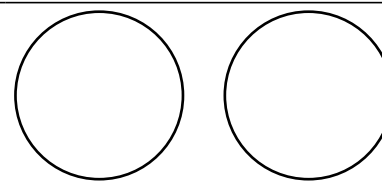
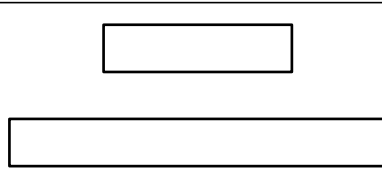
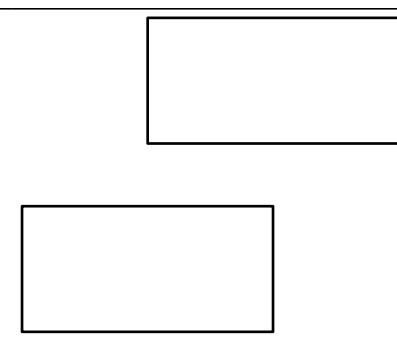
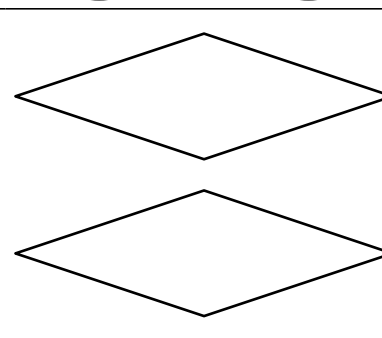
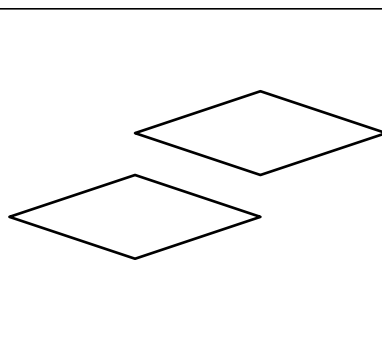
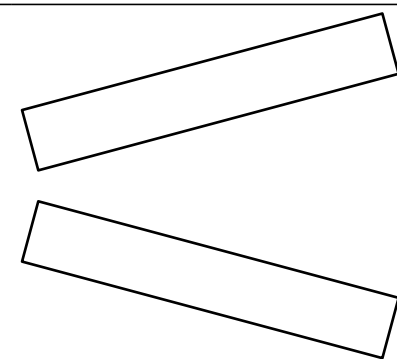
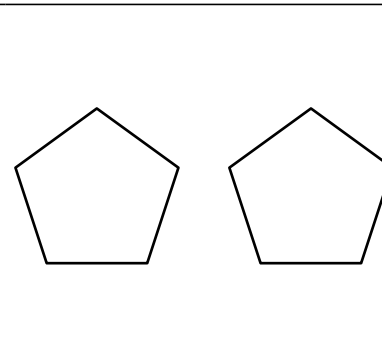
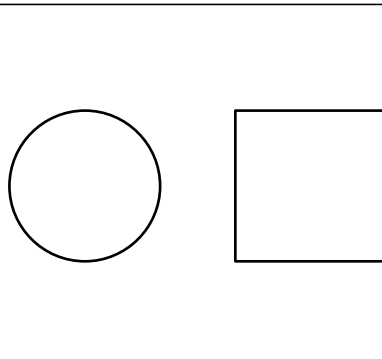


Enunciados

Dibuja el segmento que permite calcular la distancia que hay entre las dos figuras que aparecen en cada ejercicio. En algunos ejercicios puede haber más de una solución, intenta dibujar la que te parezca más «centrada».

<p>①</p> 	<p>②</p> 	<p>③</p> 
<p>④</p> 	<p>⑤</p> 	<p>⑥</p> 
<p>⑦</p> 	<p>⑧</p> 	<p>⑨</p> 
<p>⑩</p> 	<p>⑪</p> 	<p>⑫</p> 
<p>⑬</p> 	<p>⑭</p> 	<p>⑮</p> 

Soluciones

