
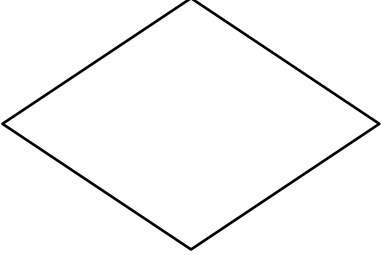
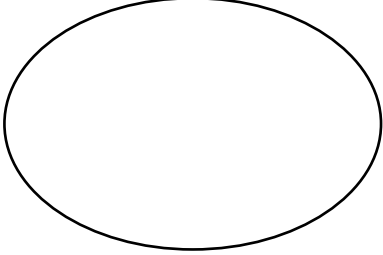
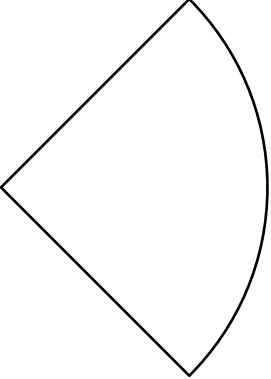
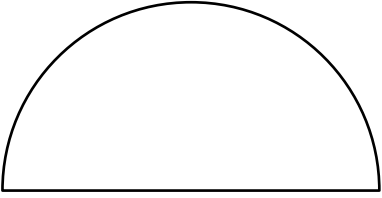
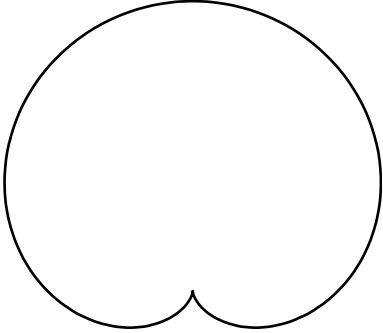
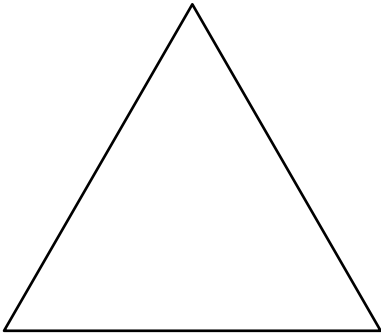
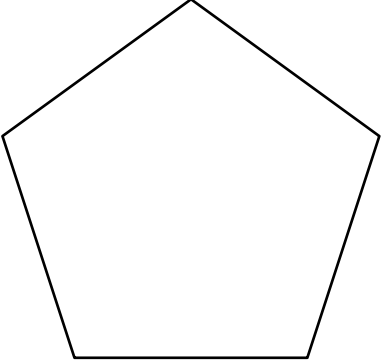


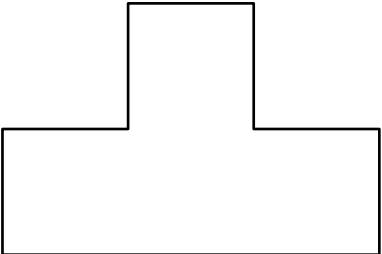
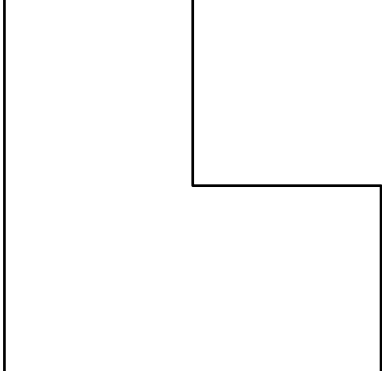


Enunciados

Representa todos los ejes de coordenadas de las siguientes figuras. Con casi todas las figuras puedes ver su nombre, para que te vayas familiarizando con ellas, puesto que algunas las estudiaremos a continuación.

<p>①</p>  <p>Rectángulo</p>	<p>②</p>  <p>Rombo</p>	<p>③</p>  <p>Elipse</p>
<p>④</p>  <p>Sector circular</p>	<p>⑤</p>  <p>Segmento circular</p>	<p>⑥</p>  <p>Cardioides</p>
<p>⑦</p>  <p>Triángulo equilátero</p>	<p>⑧</p>  <p>Pentágono regular</p>	<p>⑨</p>  <p>Pentágono estrellado</p>
<p>⑩</p>  <p>Figura 10</p>	<p>⑪</p>  <p>Figura 11</p>	<p>⑫</p>  <p>Figura 12</p>

Soluciones

