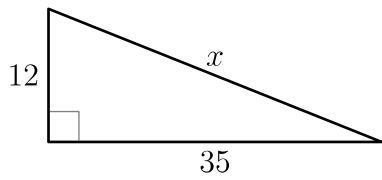
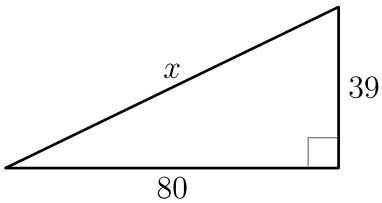
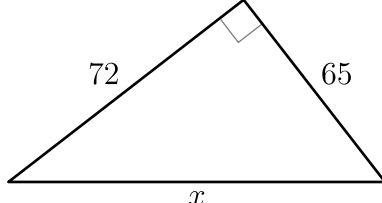
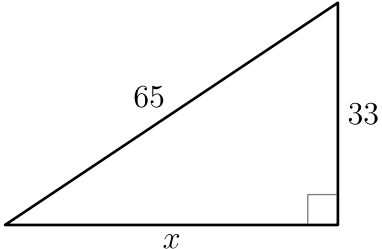
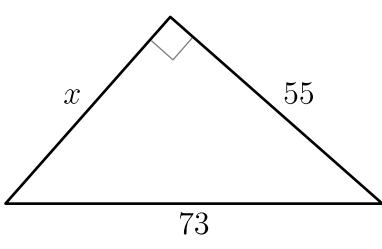
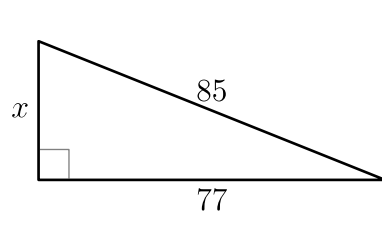
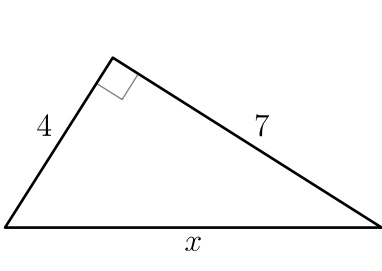
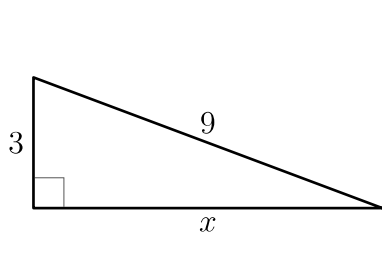
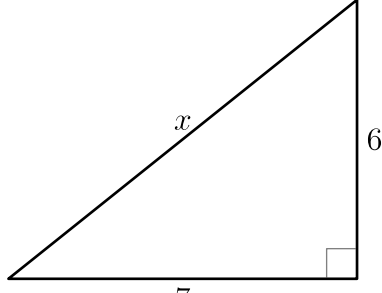
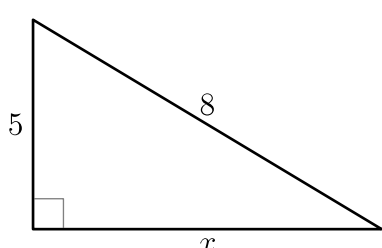
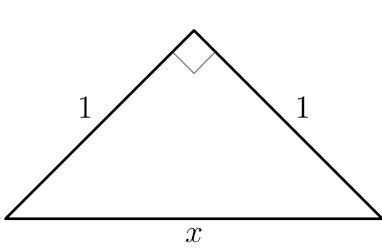
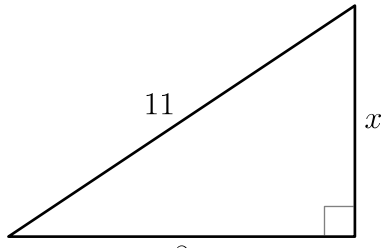
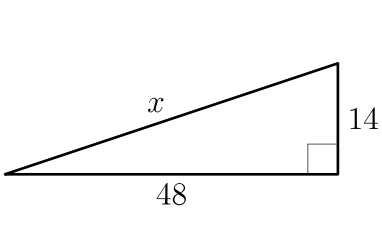
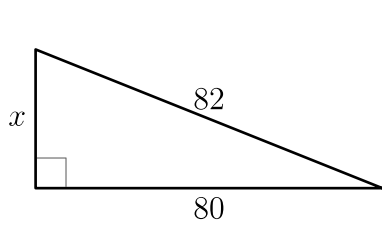
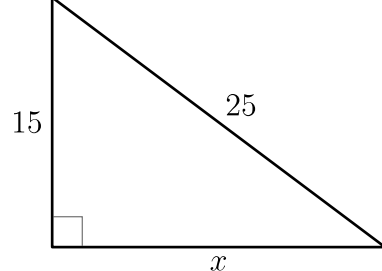
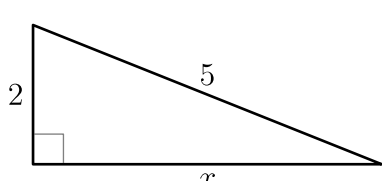
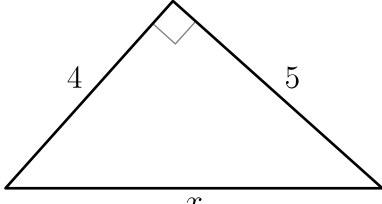
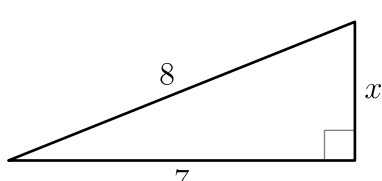


Enunciados

Calcula el valor de x en cada una de las siguientes figuras. Los resultados que no sean exactos debes darlos redondeando a la décima.

<p>①</p> 	<p>②</p> 	<p>③</p> 
<p>④</p> 	<p>⑤</p> 	<p>⑥</p> 
<p>⑦</p> 	<p>⑧</p> 	<p>⑨</p> 
<p>⑩</p> 	<p>⑪</p> 	<p>⑫</p> 
<p>⑬</p> 	<p>⑭</p> 	<p>⑮</p> 
<p>⑯</p> 	<p>⑰</p> 	<p>⑱</p> 

Soluciones

① $x = 37$

② $x = 89$

③ $x = 97$

④ $x = 56$

⑤ $x = 48$

⑥ $x = 36$

⑦ $x = 8,1$

⑧ $x = 8,5$

⑨ $x = 9,2$

⑩ $x = 6,2$

⑪ $x = 1,4$

⑫ $x = 7,5$

⑬ $x = 50$

⑭ $x = 18$

⑮ $x = 20$

⑯ $x = 4,6$

⑰ $x = 6,4$

⑱ $x = 3,9$