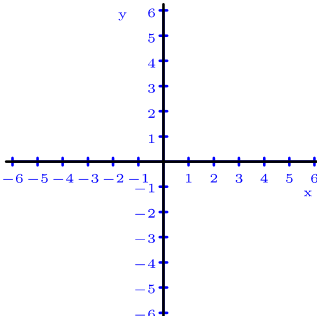
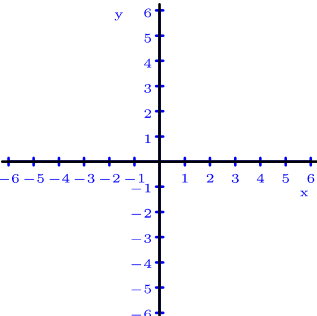
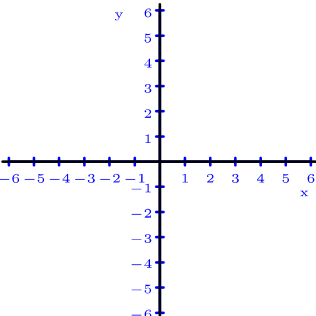
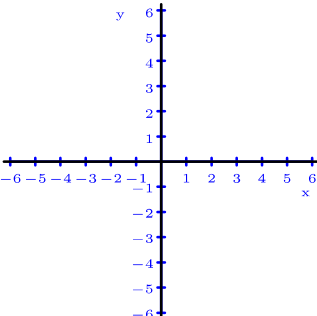
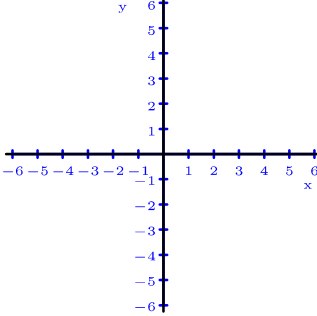
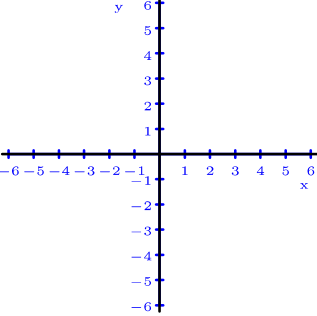
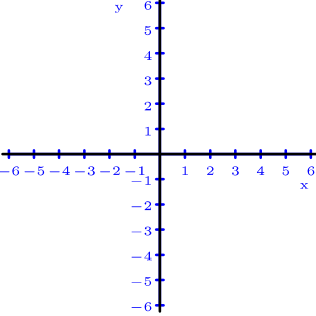
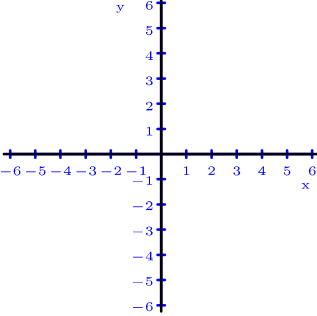
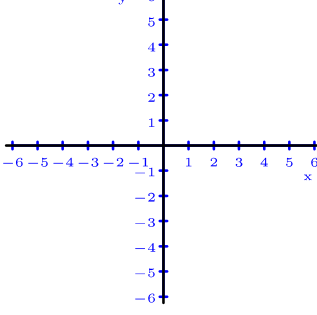
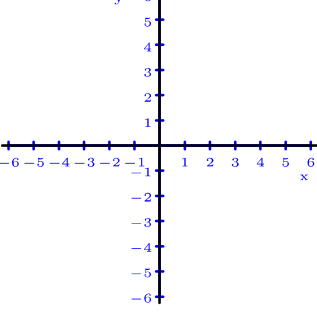
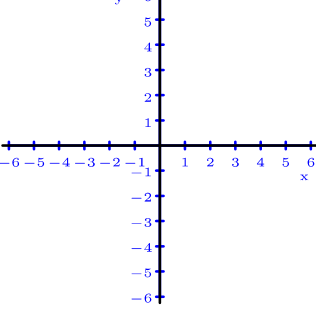
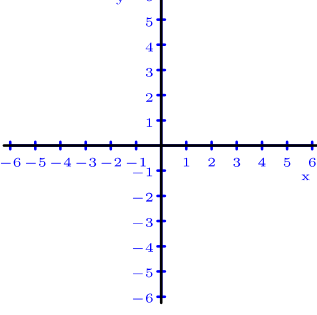
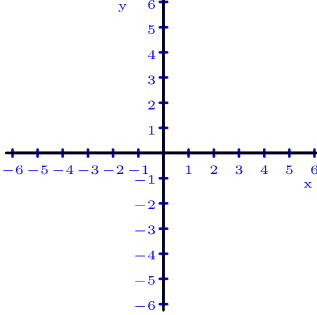
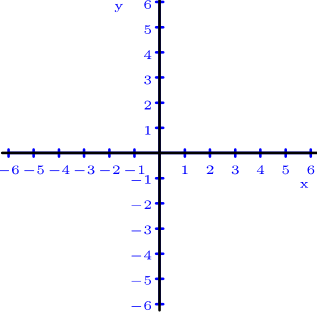
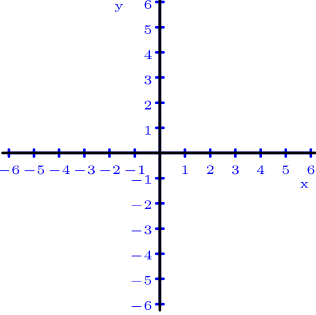
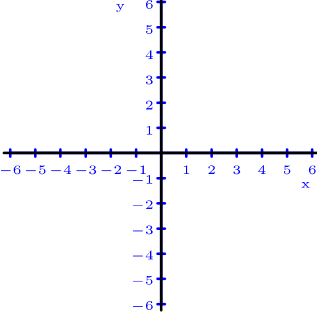


Enunciados

Representa gráficamente todas las soluciones de las siguientes ecuaciones.

<p>① $3x+2y=6$</p> 	<p>② $x-2y=0$</p> 	<p>③ $5x+3y=-15$</p> 	<p>④ $4x+3y=0$</p> 
<p>⑤ $-x+2y=4$</p> 	<p>⑥ $5x-4y=20$</p> 	<p>⑦ $4x+y=4$</p> 	<p>⑧ $-5x+6y=30$</p> 
<p>⑨ $6x+5y=30$</p> 	<p>⑩ $10x+6y=15$</p> 	<p>⑪ $3x-y=6$</p> 	<p>⑫ $x+3y=0$</p> 
<p>⑬ $2x+3y=6$</p> 	<p>⑭ $2x-y=-4$</p> 	<p>⑮ $x+2y=-6$</p> 	<p>⑯ $-x+y=3$</p> 

Soluciones

Las rectas que dibujes deben corresponder con las de estas soluciones, independientemente de los puntos que hayas utilizado.

